




Fördermappe für:  
**Egehan K**

Fach: Mathematik


Erstellt am: 07.09.2025

## Ergänzen

### 1 Schreibe die Rechnung auf.




$$4 + \underline{2} = 6$$




$$5 + \underline{\quad} = 8$$



$$1 + \underline{\quad} = 5$$



$$6$$



$$6 + \underline{\quad} = 7$$

### 2 Lege und rechne.



$$8 + \underline{2} = 10$$



$$2 + \underline{\quad} = 5$$



$$3 + \underline{\quad} = 8$$



$$9 + \underline{\quad} = 10$$



$$7 + \underline{\quad} = 9$$



$$5 + \underline{\quad} = 7$$



$$3 + \underline{\quad} = 6$$



$$6 + \underline{\quad} = 10$$



$$1 + \underline{\quad} = 9$$

### 3 Lege und rechne.

$$1 + \underline{\quad} = 7$$

$$4 + \underline{\quad} = 8$$

$$7 + \underline{\quad} = 9$$

$$2 + \underline{\quad} = 4$$

$$5 + \underline{\quad} = 6$$

$$8 + \underline{\quad} = 10$$

$$3 + \underline{\quad} = 10$$

$$6 + \underline{\quad} = 9$$

$$9 + \underline{\quad} = 10$$



Name: .....

Datum: .....


## Dreiecke und Vierecke

**1** Male an: Dreiecke rot, Vierecke blau.


**Zähle:**

\_\_\_ Dreiecke

\_\_\_ Vierecke



**2** Spure nach: Dreiecke rot, Vierecke blau.



Name: .....

Datum: .....

## Minusaufgaben bis 20

### 1 Finde Minusaufgaben.



$$7 - 4 = \underline{\quad}$$

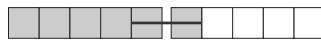


$$\underline{\quad} - \underline{\quad} = \underline{\quad}$$

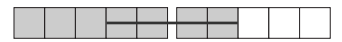
### 2 Finde Minusaufgaben.



$$8 - 3 = 5$$



$$\underline{\quad} - \underline{\quad} = \underline{\quad}$$



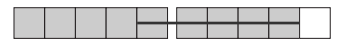
$$\underline{\quad} - \underline{\quad} = \underline{\quad}$$



$$\underline{\quad} - \underline{\quad} = \underline{\quad}$$

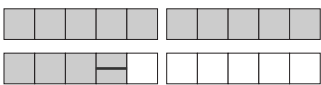


$$\underline{\quad} - \underline{\quad} = \underline{\quad}$$



$$\underline{\quad} - \underline{\quad} = \underline{\quad}$$


### 3



$$14 - 1 = 13$$



$$\underline{\quad} - \underline{\quad} = \underline{\quad}$$




$$\underline{\quad} - \underline{\quad} = \underline{\quad}$$



$$\underline{\quad} - \underline{\quad} = \underline{\quad}$$




$$\underline{\quad} - \underline{\quad} = \underline{\quad}$$



$$\underline{\quad} - \underline{\quad} = \underline{\quad}$$

### 4 Streiche durch und rechne.



$$15 - 3 = 12$$



$$13 - 2 = \underline{\quad}$$



$$18 - 4 = \underline{\quad}$$



$$14 - 4 = \underline{\quad}$$



$$19 - 6 = \underline{\quad}$$



$$17 - 5 = \underline{\quad}$$



Name: .....

Datum: .....

## Plusaufgaben bis 20

### 1 Erst bis zur 10, dann weiter.



$$9 + 3 = 12$$

$$9 + 1 = 10$$

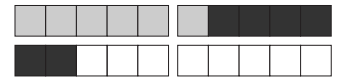
$$10 + 2 = 12$$



$$8 + 6 = \underline{\quad}$$

$$8 + \underline{\quad} = 10$$

$$10 + \underline{\quad} = \underline{\quad}$$



$$6 + 6 = \underline{\quad}$$

$$6 + \underline{\quad} = 10$$

$$10 + \underline{\quad} = \underline{\quad}$$

### 2



$$7 + 6 = \underline{\quad}$$

$$7 + \underline{\quad} = 10$$


$$10 + \underline{\quad} = \underline{\quad}$$



$$3 + 9 = \underline{\quad}$$

$$3 + \underline{\quad} = 10$$

$$10 + \underline{\quad} = \underline{\quad}$$



$$4 + 7 = \underline{\quad}$$

$$4 + \underline{\quad} = 10$$

$$10 + \underline{\quad} = \underline{\quad}$$

### 3

#### Male und rechne.



$$7 + 5 = 12$$

$$7 + 3 = 10$$

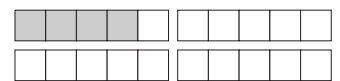
$$10 + 2 = 12$$



$$5 + 8 = \underline{\quad}$$

$$5 + \underline{\quad} = 10$$

$$10 + \underline{\quad} = \underline{\quad}$$



$$4 + 8 = \underline{\quad}$$

$$4 + \underline{\quad} = 10$$

$$10 + \underline{\quad} = \underline{\quad}$$

### 4



$$7 + 7 = \underline{\quad}$$

$$7 + \underline{\quad} = 10$$

$$10 + \underline{\quad} = \underline{\quad}$$



$$6 + 7 = \underline{\quad}$$

$$6 + \underline{\quad} = 10$$

$$10 + \underline{\quad} = \underline{\quad}$$



$$5 + 6 = \underline{\quad}$$

$$5 + \underline{\quad} = 10$$

$$10 + \underline{\quad} = \underline{\quad}$$

### 5

$$3 + 9 = \underline{\quad}$$

$$3 + \underline{\quad} = 10$$

$$10 + \underline{\quad} = \underline{\quad}$$

$$8 + 8 = \underline{\quad}$$

$$8 + \underline{\quad} = 10$$

$$10 + \underline{\quad} = \underline{\quad}$$

$$7 + 8 = \underline{\quad}$$

$$7 + \underline{\quad} = 10$$

$$10 + \underline{\quad} = \underline{\quad}$$

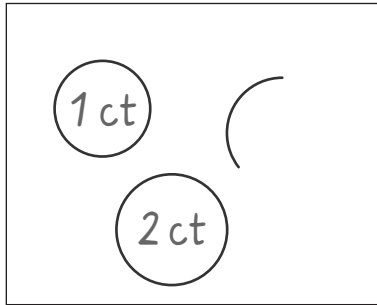


Name: .....


Datum: .....

## Geld


### 1 Lege und zeichne.



5 ct




15 ct



20 ct



5 €






16 €



20 €

### 2 Wie viel Geld kostet es? Lege und zeichne.

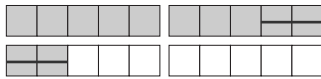


Diese Aufgaben fand ich:



# Minusaufgaben bis 20

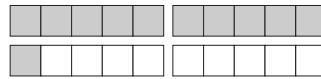
## 1 Streiche durch und rechne.



$$12 - 4 = \underline{8}$$

$$12 - \underline{2} = 10$$

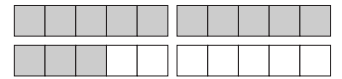
$$10 - \underline{2} = \underline{8}$$



$$11 - 8 = \underline{\quad}$$

$$11 - \underline{\quad} = 10$$

$$10 - \underline{\quad} = \underline{\quad}$$



$$13 - 7 = \underline{\quad}$$

$$13 - \underline{\quad} = 10$$

$$10 - \underline{\quad} = \underline{\quad}$$

## 2



$$16 - 7 = \underline{\quad}$$

$$16 - \underline{\quad} = 10$$

$$10 - \underline{\quad} = \underline{\quad}$$



$$17 - 9 = \underline{\quad}$$

$$17 - \underline{\quad} = 10$$

$$10 - \underline{\quad} = \underline{\quad}$$



$$14 - 6 = \underline{\quad}$$

$$14 - \underline{\quad} = 10$$

$$10 - \underline{\quad} = \underline{\quad}$$

## 3 Erst bis zur 10, dann weiter.

$$15 - 9 = \underline{6}$$

$$15 - \underline{5} = 10$$

$$10 - \underline{4} = \underline{6}$$

$$12 - 5 = \underline{\quad}$$

$$12 - \underline{\quad} = 10$$

$$10 - \underline{\quad} = \underline{\quad}$$

$$17 - 8 = \underline{\quad}$$

$$17 - \underline{\quad} = 10$$

$$10 - \underline{\quad} = \underline{\quad}$$

## 4

$$13 - 5 = \underline{\quad}$$

$$13 - \underline{\quad} = \underline{10}$$

$$\underline{10} - \underline{\quad} = \underline{\quad}$$

$$11 - 3 = \underline{\quad}$$

$$11 - \underline{\quad} = \underline{\quad}$$

$$\underline{\quad} - \underline{\quad} = \underline{\quad}$$

$$14 - 9 = \underline{\quad}$$

$$14 - \underline{\quad} = \underline{\quad}$$

$$\underline{\quad} - \underline{\quad} = \underline{\quad}$$

## 5

$$12 - 2 = \underline{\quad}$$

$$12 - 3 = \underline{\quad}$$

$$12 - 4 = \underline{\quad}$$

$$12 - 5 = \underline{\quad}$$

$$12 - 6 = \underline{\quad}$$

$$15 - 5 = \underline{\quad}$$

$$15 - 6 = \underline{\quad}$$

$$15 - 7 = \underline{\quad}$$

$$15 - 8 = \underline{\quad}$$

$$15 - 9 = \underline{\quad}$$

$$13 - 3 = \underline{\quad}$$

$$13 - 4 = \underline{\quad}$$

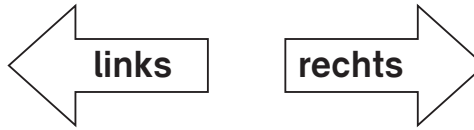
$$13 - 5 = \underline{\quad}$$

$$13 - 6 = \underline{\quad}$$

$$13 - 7 = \underline{\quad}$$



## Lagebeziehungen



### 1 Der Käfer läuft. Wo landet er? Kreuze an.

a) 4 Felder nach links.



b) 6 Felder nach rechts.



c) 5 Felder nach links, dann 2 nach rechts.



### 2 Zeichne einen Ball jeweils an die richtige Stelle.

a) auf das Bett.



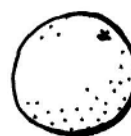
b) unter das Bett.



c) neben das Bett.



### 3 Stimmt das? Kreuze an.



stimmt

stimmt nicht

Der Apfel liegt links neben dem Brot.

☐
☐

Die Orange liegt zwischen der Banane und der Melone.

☐
☐

Das Brot liegt rechts von der Melone.

☐
☐




Name: .....

Datum: .....

## Plusaufgaben bis 20

### 1 Male und rechne passende Aufgaben.


$$\underline{\quad} + \underline{\quad} = 20$$


$$\underline{\quad} + \underline{\quad} = 20$$


$$\underline{\quad} + \underline{\quad} = 20$$

### 2 Rechne und setze fort.

$$10 + 0 = \underline{\quad}$$

$$12 + 6 = \underline{\quad}$$

$$12 + 2 = \underline{\quad}$$

$$10 + 1 = \underline{\quad}$$

$$12 + 5 = \underline{\quad}$$

$$13 + 2 = \underline{\quad}$$

$$10 + 2 = \underline{\quad}$$

$$12 + 4 = \underline{\quad}$$

$$14 + 2 = \underline{\quad}$$

$$10 + \underline{\quad} = \underline{\quad}$$

$$\underline{\quad} + \underline{\quad} = \underline{\quad}$$

$$\underline{\quad} + \underline{\quad} = \underline{\quad}$$

$$\underline{\quad} + \underline{\quad} = \underline{\quad}$$

$$\underline{\quad} + \underline{\quad} = \underline{\quad}$$

$$\underline{\quad} + \underline{\quad} = \underline{\quad}$$

$$\underline{\quad} + \underline{\quad} = \underline{\quad}$$

$$\underline{\quad} + \underline{\quad} = \underline{\quad}$$

$$\underline{\quad} + \underline{\quad} = \underline{\quad}$$

### 3 Rechne erst die leichtere Aufgabe.

$$3 + 14 = \underline{\quad}$$

$$2 + 18 = \underline{\quad}$$

$$5 + 13 = \underline{\quad}$$

$$14 + 3 = \underline{\quad}$$

$$18 + 2 = \underline{\quad}$$

$$13 + 5 = \underline{\quad}$$

### 4

$$11 + 1 = \underline{\quad}$$

$$3 + 13 = \underline{\quad}$$

$$14 + 6 = \underline{\quad}$$

$$4 + 5 = \underline{\quad}$$

$$12 + 6 = \underline{\quad}$$

$$3 + 16 = \underline{\quad}$$

$$18 + 0 = \underline{\quad}$$

$$7 + 12 = \underline{\quad}$$

$$9 + 11 = \underline{\quad}$$

$$12 + 3 = \underline{\quad}$$

$$5 + 13 = \underline{\quad}$$

$$17 + 3 = \underline{\quad}$$

### 5 Ergänze.

$$2 + \underline{\quad} = 4$$

$$4 + \underline{\quad} = 10$$

$$10 + \underline{\quad} = 17$$

$$15 + \underline{\quad} = 20$$

$$5 + \underline{\quad} = 8$$

$$8 + \underline{\quad} = 10$$

$$12 + \underline{\quad} = 14$$

$$12 + \underline{\quad} = 20$$

$$1 + \underline{\quad} = 7$$

$$3 + \underline{\quad} = 10$$

$$13 + \underline{\quad} = 16$$

$$17 + \underline{\quad} = 20$$

$$6 + \underline{\quad} = 9$$

$$5 + \underline{\quad} = 10$$

$$11 + \underline{\quad} = 19$$

$$16 + \underline{\quad} = 20$$

